

Time: 10 Minutes

Paper Math 5

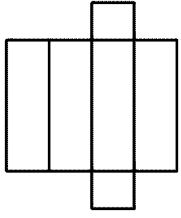
Total Marks: 10

5rd Month, 3rd Week, 3rd Day | Syllabus: Unit 7: Exercise-5 Q # 2, 3

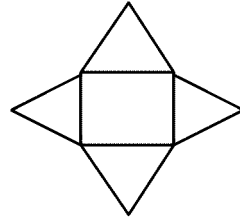
Q.No.1. Observe there nets and identifies the 3-D solids they are made of: (5)

سوال نمبر 1: ان ٹیٹس کا مشاہدہ کریں اور ان 3-D ٹھوس کی پہچان کریں جن سے یہ بنے ہیں؟

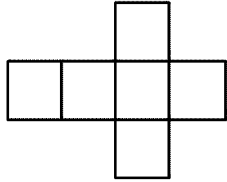
(a)



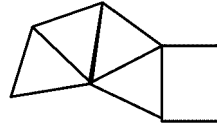
(b)



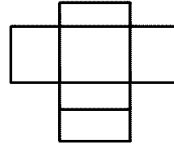
(c)



(d)



(e)




---



---



---



---



---



---



---



---



---



---

Time: 10 Minutes

Paper Math 5

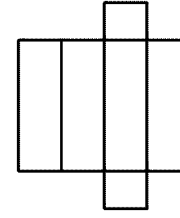
Total Marks: 10

5rd Month, 3rd Week, 3rd Day | Syllabus: Unit 7: Exercise-5 Q # 2, 3

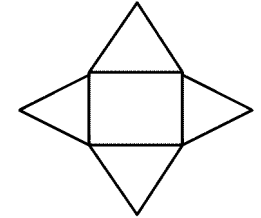
Q.No.1. Observe there nets and identifies the 3-D solids they are made of: (5)

سوال نمبر 1: ان ٹیٹس کا مشاہدہ کریں اور ان 3-D ٹھوس کی پہچان کریں جن سے یہ بنے ہیں؟

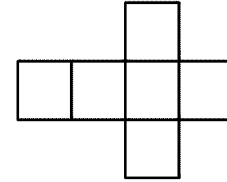
(a)



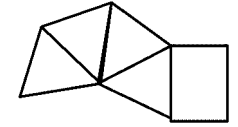
(b)



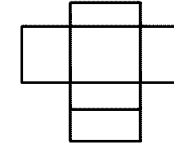
(c)



(d)



(e)




---



---



---



---



---



---



---



---



---



---